

Montcalm County



Horse and Pony Project Supplement to Record Book


Advanced

Name: _____

Address: _____

4-H Club: _____

4-H Leader: _____



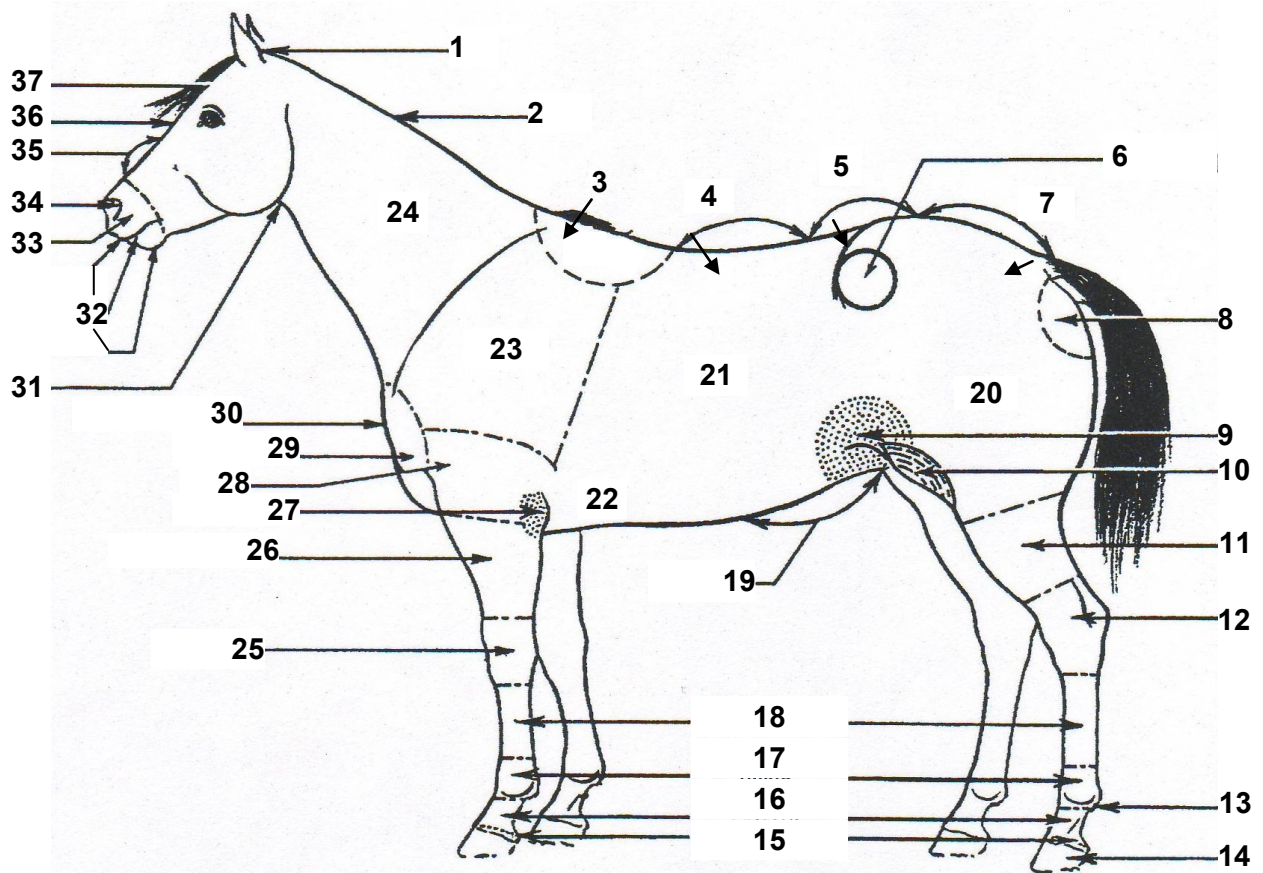
MICHIGAN STATE | **Extension**
UNIVERSITY



Michigan State University Extension programs and materials are open to all without regard to race, color, national origin, gender, gender identity, religion, age, height, weight, disability, political beliefs, sexual orientation, marital status, family status or veteran status.

Structure of the Horse

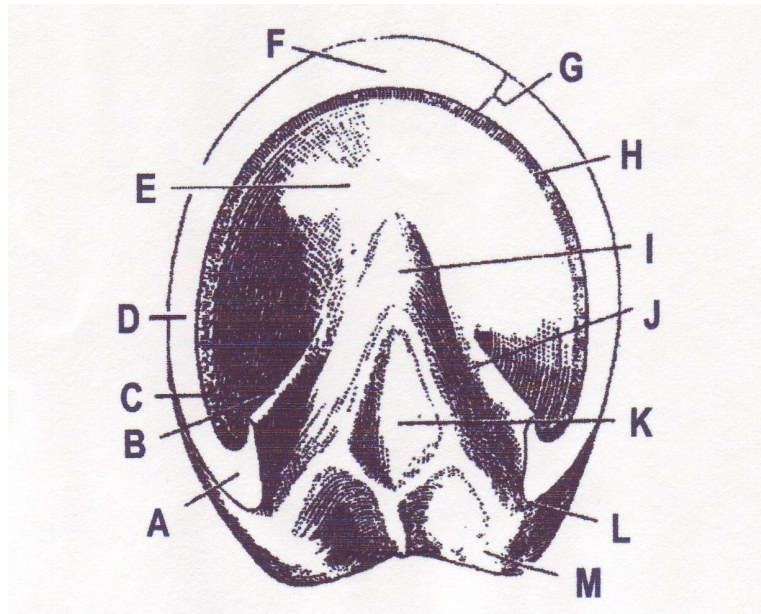
Identify the 37 parts of the horse, without using the books



- | | | |
|-----------|-----------|-----------|
| 1. _____ | 14. _____ | 27. _____ |
| 2. _____ | 15. _____ | 28. _____ |
| 3. _____ | 16. _____ | 29. _____ |
| 4. _____ | 17. _____ | 30. _____ |
| 5. _____ | 18. _____ | 31. _____ |
| 6. _____ | 19. _____ | 32. _____ |
| 7. _____ | 20. _____ | 33. _____ |
| 8. _____ | 21. _____ | 34. _____ |
| 9. _____ | 22. _____ | 35. _____ |
| 10. _____ | 23. _____ | 36. _____ |
| 11. _____ | 24. _____ | 37. _____ |
| 12. _____ | 25. _____ | |
| 13. _____ | 26. _____ | |

Hoof Anatomy and Terminology

- A. _____
- B. _____
- C. _____
- D. _____
- E. _____
- F. _____
- G. _____
- H. _____
- I. _____
- J. _____
- K. _____
- L. _____



M. _____

1. Farrier: _____

2. Laminae: _____

3. Thrush: _____

4. Gravel: _____

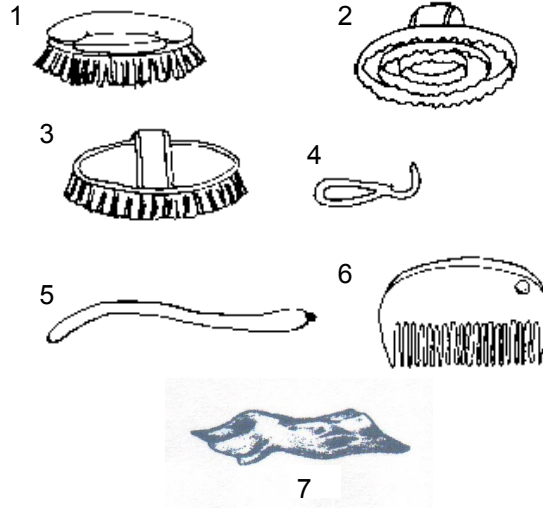
5. Ringbone: _____

6. Navicular Disease: _____

Grooming Equipment and Practices

Identify the basic pieces of grooming equipment.

1. _____
2. _____
3. _____
4. _____
5. _____
6. _____
7. _____



Use the Horses and Horsemanship's chapter on Grooming and Preparation for the Show to answer the following questions.

When grooming your horse what is the proper order the grooming should be done in? Place a number on each line (1 - 5) to put in the correct order.

Grooming the Body _____ Cleaning the Feet _____ Mane and Tail _____
 Clipping and Trimming _____ Cooling Out _____

Most good horsemen will use the following pieces of equipment to groom their animals. Tell a little bit about each one.

Brushes: _____

Clippers and/or Scissors: _____

Grooming Cloth: _____

Currycomb: _____

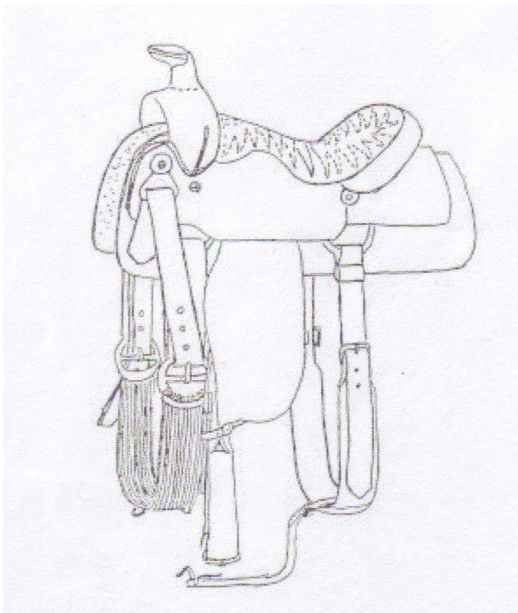
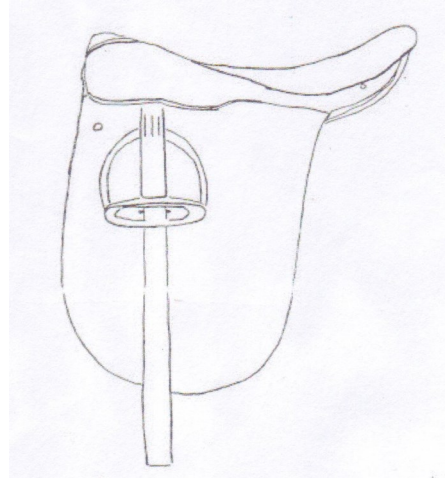
Mane and Tail Comb: _____

Hoof Pick: _____

Parts of the Saddles

Identify and name six parts on each of the different saddles.

1. _____
2. _____
3. _____
4. _____
5. _____
6. _____



1. _____
2. _____
3. _____
4. _____
5. _____
6. _____

Horsemanship

True or False

- ____ T or ____ F The rider shifts his seat to get out of balance so that the horse will change gaits.
- ____ T or ____ F Rhythm and balance are important only in relation to the horse, not the rider.
- ____ T or ____ F The basic position to sit erect, with body balanced and relaxed.
- ____ T or ____ F The safe position to mount an untrained or green horse is for the person to stand by the stirrup fender.
- ____ T or ____ F Work the horse in circles at a slow lope to help your horse learn to correct leads.
- ____ T or ____ F Balanced riders are supple and relaxed.
- ____ T or ____ F The pull of the neck rein is the signal the horse feels to tell him to turn.
- ____ T or ____ F Aids are voice, hands, legs and weight.
- ____ T or ____ F To signal a horse to take the right lead, apply pressure with the left leg.
- ____ T or ____ F Control a horse's speed by using leg pressure and rein tension.
- ____ T or ____ F "Gather" your horse by sitting in the saddle and releasing the reins.
- ____ T or ____ F Stop your horse by moving your body back, legs forward and pulling at the same time on the reins.
- ____ T or ____ F Hold the reins low and pull lightly on the reins "give and take" to make your horse back up.

Name the four basic aids to riding:

1. _____
2. _____
3. _____
4. _____

First Aid

List as many of the items you can that should be put into a first aid kit for horses.

1. _____
2. _____
3. _____
4. _____
5. _____
6. _____
7. _____
8. _____
9. _____
10. _____